

KENDRIYA VIDYALAYA IIT CAMPUS, CHENNAI - 36

Sub: English

Topic: 1. Make it shorter

2. I am the Music man

Motivation: Lead a conversation on Akbar Birbal Stories

Reading Comprehension

Read the passage and answer the following questions:

One day, Akbar drew a line on the floor and ordered, make this line shorter , but don't rub out any part of it . No one knew what to do . Each minister looked at the line and was puzzled . Birbal started smiling .

1. Who drew a line ?

2. Where did he draw the line ?

3. Who looked at the line ?

4. Who started to smile?

5. Complete the sentence from the passage:

Each minister looked at the line and was _____.

SPELLING

Tick the correct spelling:

1. Shimny / Chimney
2. Gates / Gattes
3. Fluor / Floor
4. Birbal / Birbaall
5. Pussled / Puzzled

WRITING

Draw and write five sentences about your favourite musical instrument.

बाघ के बच्चे में रंग भरो



सही शब्द चुनकर वाक्य पूरे करो :

धारियाँ मांसाहारी रात बिल्ली राष्ट्रीय

बाघ हमारा _____ जानवर है | यह हमारा _____ पशु है | बाघ _____

जाति का जानवर है | बाघ _____ को शिकार करता है | इसके शरीर पर _____ होती

लं |

Hints to make it simple for you

National_ राष्ट्रीय meat eaters and grass eaters : मांसाहारी / शाकाहारी

Tiger facts

The tiger is the biggest species of the cat family. It is the national animal of India. Around half of tiger cubs don't live beyond two years of age. Tiger cubs leave their mother when they are around 2 years of age. Tigers are good swimmers and can swim up to 6 kilometres. Tigers usually hunt alone at night time.

Links to view : <http://nroer.gov.in/gstudio/resources/videos/show/9298/>

[:-https://www.youtube.com/watch?v=nbcV_qhxeo8#t=18](https://www.youtube.com/watch?v=nbcV_qhxeo8#t=18)

SUB: Mathematics Class : II Topic : Add our points

Synopsis: Simple addition without carry over

ELO: 1. Able to add 1 digit and 2 digit numbers

2. Able to add three 1 digit numbers

3. Simple word problems

ABILITY IN COMPUTATION

Add the following:

a) $\begin{array}{r} 23 \\ + 46 \\ \hline \\ \hline \end{array}$

b) $\begin{array}{r} 50 \\ + 37 \\ \hline \\ \hline \end{array}$

c) $\begin{array}{r} 35 \\ + 23 \\ \hline \\ \hline \end{array}$

$+ 46$

$+ 37$

$+ 23$

d) $\begin{array}{r} 35 \\ + 2 \\ \hline \\ \hline \end{array}$

e) $\begin{array}{r} 33 \\ + 3 \\ \hline \\ \hline \end{array}$

f) $\begin{array}{r} 20 \\ + 4 \\ \hline \\ \hline \end{array}$

5

3

0

$+ 2$

$+ 3$

$+ 4$

PROBLEM SOLVING ABILITY

VERBAL PROBLEMS:

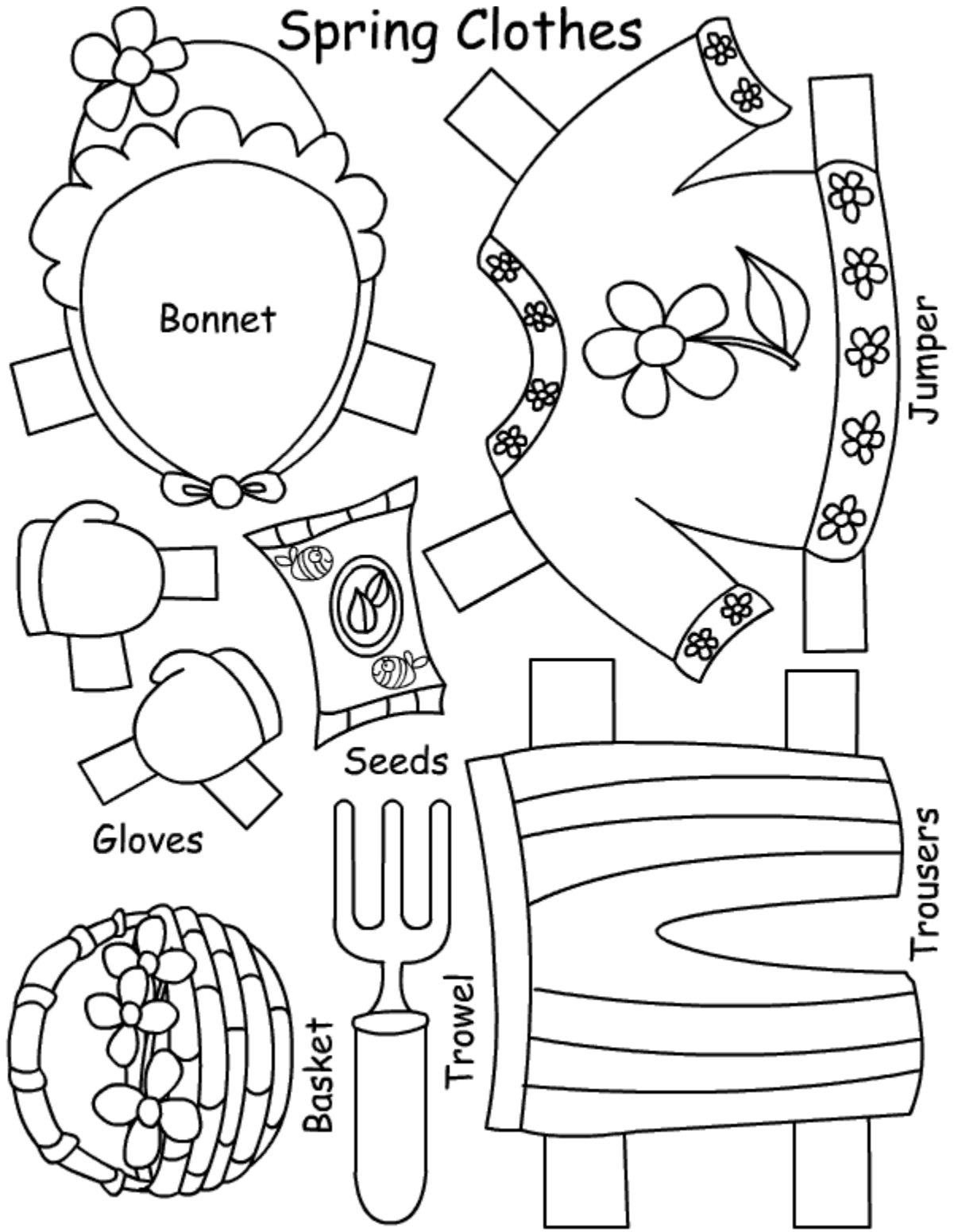
1. There are 20 apples in a box. 34 more apples are added to it. What is the total number of apples now?

2. Sheela has 34 pens and Leela has 44 pens. How many pens are there altogether?

3. In a garden there were 20 mango trees and 34 coconut trees. How many trees were there in all?

Hi all!


Cut out four dolls, and dress them up for all the four seasons. Bring to school ! Colour it make it as nealty as possible



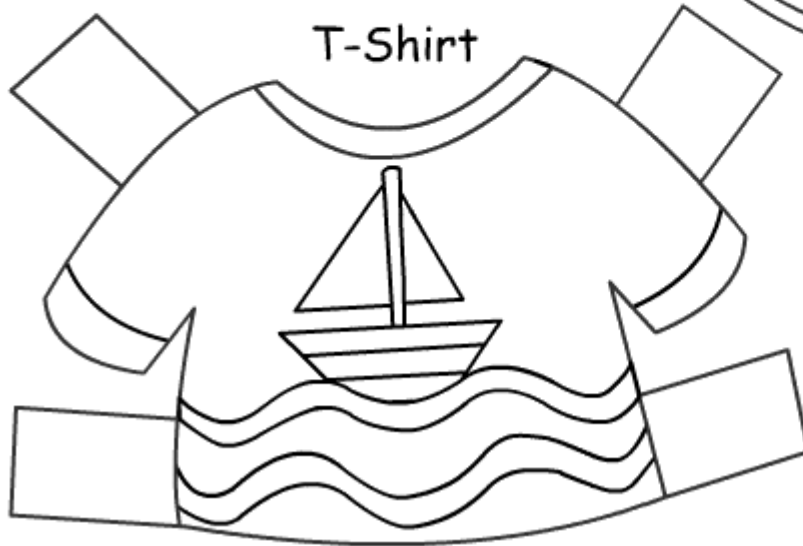
Summer Clothes



Sunglasses



Cap



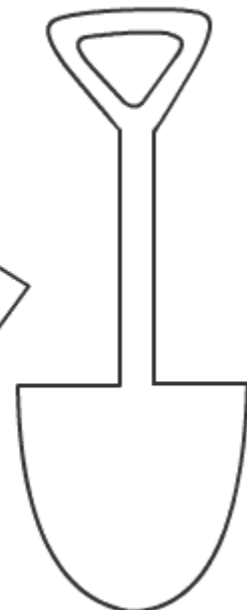
T-Shirt




Bucket



Swimming Trunks



Spade



Rubber Ring

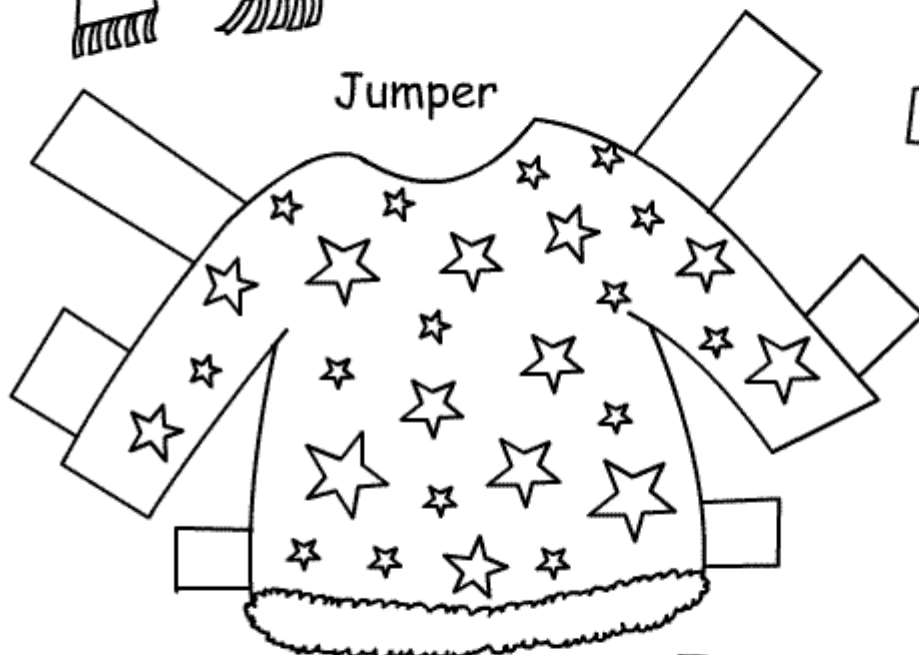
Winter Clothes



Scarf



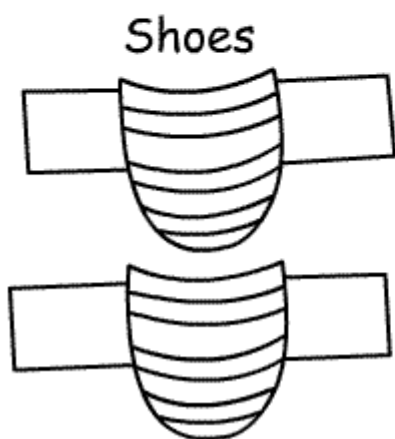
Bobble Hat



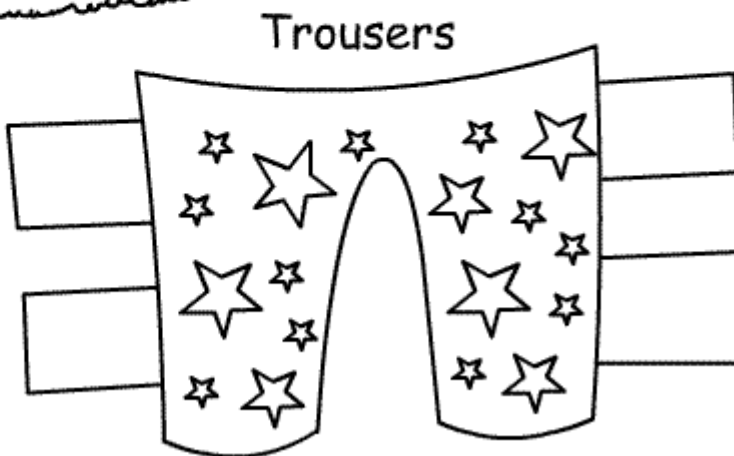
Jumper



Mittens





Shoes

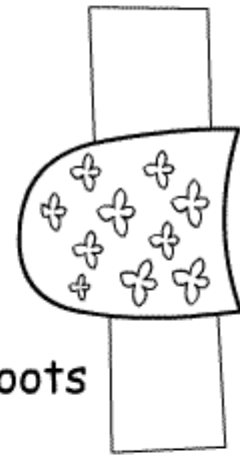
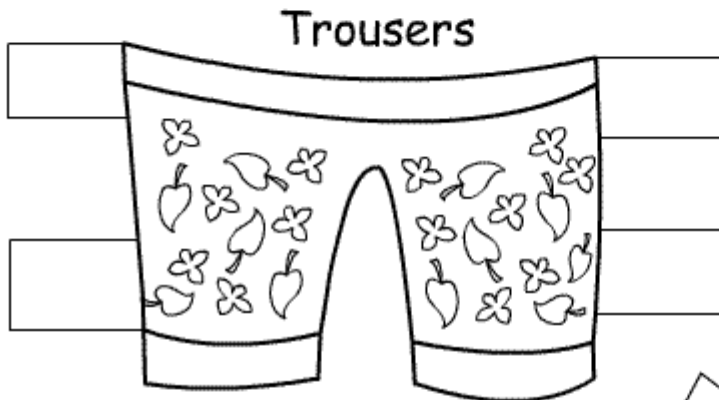


Trousers

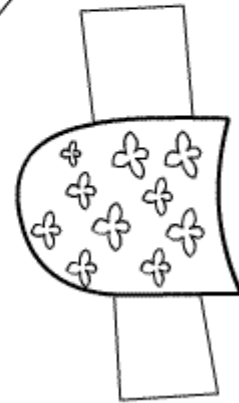
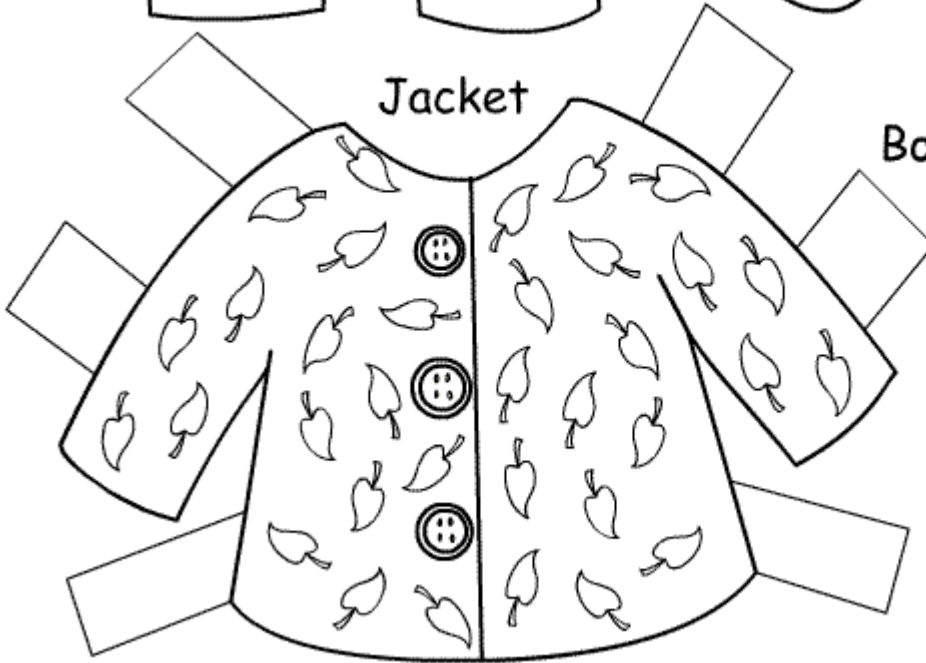
Autumn Clothes




Umbrella



Boots





The [four seasons](#) are spring, summer, fall and winter. We wear clothes according to the weather. The trees also undergo change along with change in seasons. Spring is the season of flowers. Summer brings fruits. In autumn all leaves fall down. Winter comes and trees stand bare. Colour the tree, cut on the dotted lines and bring to school on 23 November.

