

Question Bank for FA3 / Holiday Home Work

Class III

English

FA3 Question bank

I. Answer the following questions:

1. What are the "precious loads" that they carry?
2. What is 'dusk' and 'dawn'?
3. What sounds do you hear on the road in the morning?
4. Why is the road annoyed with the crow?
5. Why did the child go with the puppy?
6. What happened to the little tiger cub when he chased the frog?
7. Who does the postman bring letters for?
8. What does the child decide to do?
9. What does the baby do with the pebbles?
10. Why does the washer man bring donkeys?

Grammar

I. Write the plural forms for the following:

1. Child
2. woman
3. tree
4. potato
5. man
6. duck
7. foot
8. tooth
9. mouse
10. ox

II. Add "-ful" to make a word

1. play
2. use
3. beauty
4. plenty
5. joy
6. help

III. Add "-ly" to make a word

1. love
2. real
3. slow
4. soft
5. true
6. quiet

IV. Add "-ish" to make a word

1. child
2. fool
3. baby
4. slug

V. Use can/ cannot in right places:

1. I _____ hear the sound of cars.
2. I _____ hear the trains whistle.
3. He _____ run fast and reach the goal.
4. She _____ dance as she got hurt in leg.
5. I _____ hear the wind blow.
6. I _____ hear the dogs barking.

Creative writing

1. Write a paragraph on how you help at home.
2. Write about your brother or sister.
3. Write about Tiger or post office.

Spelling

I. Guess the names:

1. I give wool _____.
2. I carry loads _____.
3. I am the ship of the desert _____.
4. I am man's best friend _____.
5. I give you milk _____.

II. Unscramble the words:

1. oiln
2. ppuy
3. droa
4. ntria
5. semou
6. rede
7. lubl
8. giter

III. Circle the correct words

1. Plains/Planes
2. Chirrup/Chirup
3. Foolish/Folish
4. Bred/Bread
5. Bellowed/Belowed
6. Roared/Rored
7. Chased/Chesed
8. Though/Thouh
9. Sallow/Swallow
10. Nauty/Naughty.

| दिए गए अनुच्छेद को पढ़कर पूछे गए प्रश्नों के उत्तर लिखिए:

गर्मी की छुट्टियाँ चल रही थीं। मैंने तथा मेरे कुछ मित्रों ने चिड़ियाघर की सैर का कार्यक्रम बनाया। हम लोग पटना के संजय गाँधी जैविक उद्यान में सुबह साढ़े दस बजे पहुँच गए। वहाँ काफी चहल-पहल थी। सर्वप्रथम हम लोगों ने गजराज के दर्शन किए। वे सूँड का संचालन कर पीपल के हरे पत्तों का स्वाद ले रहे थे। हाथी पर सवार बच्चे फूले नहीं समा रहे थे। आगे बढ़े तो बंदरों और लंगूरों की उछल-कूद का नज़ारा देखा। अब शीशे के घरों में कैद नागों की बारी थी। नागराज कुंडली मारे ध्यानमग्न मुद्रा में थे तो अजगर कुंभकर्णी निद्रा में सोया हुआ था। वहाँ कुछ ज़हरीले बिच्छू भी थे। उन्हें देखकर हम सिहर उठे। उद्यान में भालू, चीता, शेर, हिरन, गैंडा, ज़ेबरा और विचित्र रंगों वाले पक्षी भी थे। हमने उन सबको देखा।

1. कौन सी छुट्टियाँ चल रही थी ?

2. उन्होंने कहाँ की सैर का कार्यक्रम बनाया ?

3 सर्वप्रथम हमने के दर्शन किए ।

4. दो संयुक्त अक्षर ढूँढकर लिखो :

5. दो सर्वनाम अनुच्छेद से ढूँढकर लिखो:

6. इस कहानी को आप क्या शीर्षक(Title) दोगे ?

लेखन

उत्तर लिखो:

1.सेठ और अवंती में तुम किसे अधिक अक्लमंद कहोगे?

2. अवंती ने किस की दुकान खोली ?

3. गुरुजी कहाँ जा रहे थे ?

4 सप्ताह के दिनों के नाम लिखो ।

5. किन – किन अनाजों को पीसकर रोटी बनाते हैं ?

6 पाँच रंगों के नाम लिखो ।

7. डंक मारने वाले जानवरों के नाम लिखो ।

8 मीरा बहन ने किस आश्रम की स्थापना की ?

9. अवंती को देखकर की किसको ईर्ष्या होने लगी थी ?

10 मीरा बहन का जन्म कहाँ हुआ था ?

11. अवंती को देखकर की किसको ईर्ष्या होने लगी थी ?

व्याकरण

I नीचे दिए गए वाक्यों में उचित विराम चिह्न लगाओ।

- (1) साँप साँप (!, ?, |)
- (2) तुम्हारा नाम क्या है (!, ?, |)
- (3) वह मेरा छोटा भाई है (!, ?, |)
- (4) अब हमारे लिए फल कौन लाएगा (!, ?, |)
- (5) वाह क्या मीठा फल है (!, ?, |)

II भरओ:

- (1) अहाते ___ एक साँप रेंग रहा था। (में / मैं)
- (2) पिसवाना है, इसलिए बाजार जा रहा हूँ ।(गेहूँ / दाल)
- (3) चुटकी भर मिलाएंगे ।(नमक / आटा)
- (4) साँप नारियल के खोल की _____ जाने लगा। (ओर / और)
- (5) ठंड पहने वर्दी आई ।(की / के लिए)
- (6) मीरा बहन ___ जन्म इंग्लैंड में हुआ था। (का / की)

- (7) सारे बदन ठिठुरन भर दी | (को / मे)
- (8) पिंजड़े के अंदर बकरी बाँधी | (दो / एक)
- (9) एक बाघ ___ गाँव ___ घुसकर गाय ___ मार डाला। (को / में / ने)
- (10) मुझे नींद रही है | (आ / जा)

III संज्ञा के नीचे रेखा खींचो:

- (1) मैं दिल्ली में रहता हूँ।
- (2) ताजमहल आगरा मे है।
- (3) राम और श्याम अच्छे मित्र हैं।
- (4) सोना महंगा है ।
- (5) मेरा नाम नीता है।
- (6) यह आम बहुत मीठा है ।
- (7) यह अंगूर बहुत कड़वा है।
- (8) राम और श्याम अच्छे मित्र है ?
- (9) शेर जंगल मे रहता है ।
- (10) मैं बैलगाड़ी से आई हूँ।

IV विशेषण शब्द के नीचे रेखा खींचो:

- (1) बुद्धिमान लड़का
- (2) लाल कमीज
- (3) खूँखार डाकू
- (4) खतरनाक शेर
- (5) चालाक लोमड़ी
- (6) काला कौवा
- (7) सुंदर फूल
- (8) चटपटी दाल

- (9) गरम समोसा
(10) ठंडी आइसक्रीम

V नीचे दिए गए वाक्यों में सर्वनाम को रेखा खींचो।

- (1) हम कल दिल्ली जाएँगे।
(2) तुम्हारा क्या नाम है ?
(3) वह पढ़ता है ।
(4) यह उसकी किताब हैं ।
(5) उसने मुझे कहा ।
(6) तुम कहाँ जा रहे हो ?
(7) उसका नाम संगीता है ।
(8) माँ मुझे बुला रही हैं।

II सृजनात्मक लेखन

1. सर्दी ऋतु के बारे में पाँच वाक्य लिखो।
2 अपने बारे में पाँच वाक्य लिखो ।
3 साँप के बारे में पाँच वाक्य लिखो।
4 अपनी दादी के बारे में पाँच वाक्य लिखो।
5. रोटी बनाने की विधि लिखो।

वर्तनी

शुद्ध शब्द को गोला करो:

- (1) अहाते / आहते
(2) सर्दी / शारदी
(3) बिच्छू / बिच्छु
(4) चक्की / चक्क
(5) केन्द्रीय / केन्द्रिय

- (6) मंसूबा / मंसुबा
- (7) बृहस्पतिवार / बीरस्पतिवार
- (8) गाँव / गाव
- (9) क्विंटल / कविंटल
- (10) ईर्ष्या / ईर्ष्या

सुलेख

प्रश्न :- शुद्ध लेखन हेतु सुलेख का अभ्यास करें

MATHS

KNOWLEDGE

I. Choose the correct answers and fill in the blanks:

a) 3kg 500g = _____ gm.

- 1) 3500 2) 55000 3) 5000

b) The product of 5 and 8 is _____

- 1) 24 2) 38 3) 40

c) Any number multiply by 1 is _____

- 1) 0 2) 1 3) same no.

d) The next multiple of 5 after 30 is _____

- 1) 35 2) 36 3) 42

e) \triangle \circ \square \triangle _____ \square

- 1) \square 2) \triangle 3) \circ

f) We can measure bananas in _____

- 1) gram 2) Mili gram 3) dozen

II. a) $2 \times 6 = 4 \times \underline{\quad} = \underline{\quad}$

b) Write the multiplication facts : $7+7+7 = \underline{\quad} \times \underline{\quad} = \underline{\quad}$

c) Write the multiplication as repeated addition: $5 \times 6 = \underline{\hspace{2cm}}$

d) Complete the pattern:

abc, aabbcc, aaa _____

e) Tick the objects that will weigh more:

1. An apple or an egg : _____

2. A bunch of grapes or a bottle full of water: _____

f) _____ is the smallest unit of capacity.

g) _____ is the largest unit of capacity.

h) The short form of milliliters is _____

i) One liter = _____ milliliters.

j) The amount of a liquid a container can hold is called its _____.

k) The numbers that are multiplied are called as _____.

l) The answer after multiplication is called the _____.


UNDERSTANDING

I. Fill in the blanks:

a) $4\text{kg} = \underline{\hspace{1cm}}\text{gm}$

b) $5 \times \underline{\hspace{1cm}} = 5$

II. Complete the pattern:

a)  _____

b) 102 104 106 _____

III. Find the product of:

a)
$$\begin{array}{r} 45 \\ \times 3 \\ \hline \end{array}$$

b)
$$\begin{array}{r} 44 \\ \times 5 \\ \hline \end{array}$$

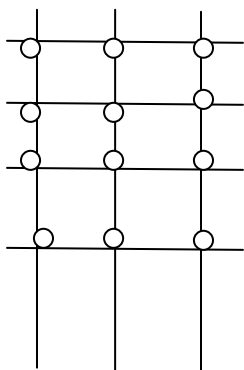
IV. Statement problem:

1) A book has 32 pages. What will be the total no. of pages in 8 such books?

V. Complete:

Repeated additon	In words	multiplication
$2+2+2+$	3 group of 2 are 6	$3 \times 2 = 6$
$7+7+7+7$	4 Groups of 7 are 28	$\underline{\hspace{1cm}} \times \underline{\hspace{1cm}} = 28$
$8+8+8$	_____	$\underline{\hspace{1cm}} \times \underline{\hspace{1cm}} = \underline{\hspace{1cm}}$
_____	_____	$3 \times 4 = 12$

VI. Fill in:



$3 \times 1 = \underline{\hspace{1cm}}$

$3 \times 2 = \underline{\hspace{1cm}}$

$3 \times 3 = \underline{\hspace{1cm}}$

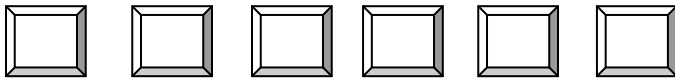
$3 \times 4 = \underline{\hspace{1cm}}$

VII. Complete the pattern:

a. 3, 6, 9, 12, 15, _____

b. A, BC, DEF, _____, _____

VIII. Color 4 boxes from the left;



ABILITY IN COMPUTATION

1. Write a multiplication sentence to solve the no. of legs these animals have in total:

a) Six camels = _____ b) Seven ducks = _____

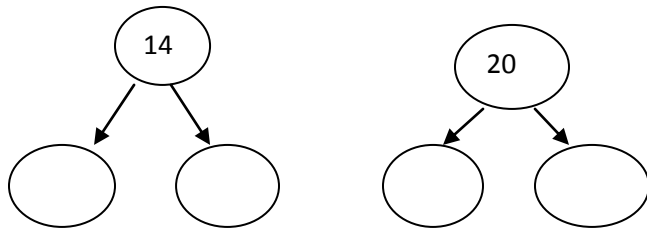
2. Look at the diagram and complete the boxes:

____ x ____ = _____

☆	☆	☆	☆	☆
☆	☆	☆	☆	☆
☆	☆	☆	☆	☆

3. Write multiplication

Factors for the following numbers:



4. Guess the unit of weigh for the following:

a) A sack of wheat _____ b) A spoon of sugar _____

5. How many flowers? _____



How many pastels all together?

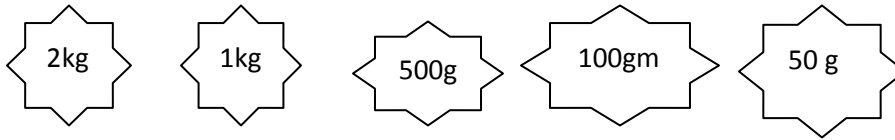
____ + ____ + ____ + ____ + ____ = _____

Or ____ x ____ = _____

6. Complete the pattern :

21, 31, 41, ___ , ___ , ___

7. In this picture given below some weights are shown. Draw the weights that you will use to weigh the object shown in the table.



S no.	Things	
1.	1 kg 500 g onion	
2.	750g carrot	
3.	150g mint	
4.	3kg 100 g sugar	
5.	550g dal	

8. Multiply the following:

a. $36 \times 11 =$ _____

b. $26 \times 11 =$ _____

c. $32 \times 11 =$ _____

d. $34 \times 100 =$ _____

e. $550 \times 10 =$ _____

f. $21 \times 100 =$ _____

g. $700 \times 10 =$ _____

h. $10 \times \underline{\quad} = 930$

9. Multiply by breaking up a factor.

a. $37 \times 8 =$ _____

b. $29 \times 5 =$ _____

c. $309 \times 7 =$ _____

d. $235 \times 3 =$ _____

PROBLEM SOLVING ABILITY

1. Match the following:

- | | |
|---------------------|-------|
| a) $\frac{1}{4}$ kg | 49 |
| b) 5 kg 100 g | 6x5 |
| c) 7x7 | 5100g |
| d) 5x6 | 250g |

2. Multiply

- | | |
|---|--|
| i) $\begin{array}{r} 345 \\ \times 5 \\ \hline \end{array}$ | ii) $\begin{array}{r} 602 \\ \times 9 \\ \hline \end{array}$ |
|---|--|

3. Statement problems:

- 1) There are 7 fans. Each fan has 3 blades. What is the total no. of blades in all?
- 2) A grasshopper covers 16cm. with every jump. How far does it go in 5 jumps?
- 3) 4 friends are walking one behind the other. Meeta is ahead of Jaya. Reena is behind Jaya. Meeta is behind Sona. Who is right in front?
- 4) There are three plants in a garden. The first plant is 10cm. taller than the second. The third is 5cm. shorter than the first. Which is the shortest plant?
- 5) There are 6 children having 20 cards with each child. How many total no. of cards they are having together?
- 6) There are 16 eggs in each clutch. How many eggs will be there in 4 such clutches?
- 7) Seema ordered 4 pizzas. Each pizza has 4 slices in it. How many total slices are in all pizzas?

Fill in the blanks:

1. Name an animal which eats insects _____.
2. We drop letters in a _____.
3. Name any two things we use to play cricket _____, _____.
4. We eat the root of _____ plant.
5. We eat the leaves of _____ plant.
6. When we get hurt, we apply _____ (turmeric / ginger).
7. We eat the stem of _____ plant.
8. We eat the seed of _____ plant.
9. The house made of snow is called an _____.
10. Medicinal plant used for tooth - ache is _____
- 11.. The script read by touching and feeling is called _____.
12. Name any two games in which nothing is needed besides players _____, _____.
13. India's National game is _____.
14. The house found on lakes is called _____.
15. _____ invented Braille Script.
16. Game which you like to play the most is _____.
17. _____ carry loads for washerman.
18. Name a game you like to play inside the house _____.
19. _____ is a house whose walls are thick and plastered with mud and roofs are of thorny bushes.
20. _____ delivers letters to our home.
21. _____ prepare honey.
22. Stamps can be got from _____.
23. Name any one medicinal plant _____.
24. The body of the post box is _____ in colour.
25. A game played on the lawn is called _____.

26. Tent is made using _____.
27. _____ is used by the potter to make pots.
28. _____ can be kept as a pet in home.
29. In places of heavy rainfall , houses are made of _____.
30. Hen gives us _____.
31. Name your favourite sportsperson _____.
32. _____ is used to plough the field.
33. _____ guards our house.
34. Parrots eat _____.
35. Cow gives us _____.

SHORT ANSWERS:

1. How much does a postcard cost?
2. List out the problems faced by disabled people.
3. How is a houseboat different from other houses?
4. How will you help blind people?
5. If you are upset , whom would you share your feelings with?
6. Name any four items made of clay.
7. Name different types of houses and explain anyone.
8. Name different parts of the plant that can be eaten with an example.
9. List out few things used to make your house. What kind of house do you live in?
10. Explain the disadvantages in playing video or computer games.
11. List out two indoor and two outdoor games.
12. Explain the advantages in playing outdoor games.
13. Write your house address.
14. Name the things we get in the post office.
15. What is your favourite pet animal. How do you take care of it?
16. How people communicated in olden days?
17. List out the other means of communication.

LONG ANSWER:

1. List any five medicinal plants with their uses and draw and colour any one.
2. Describe the journey of the letter.
3. List the steps in making pots.
4. List out different types of houses and the places they are found.
5. Name the different types of indoor games and outdoor games.
6. How do different animals help people in day to day life?