

KENDRIYA VIDYALAYA -I IT Chennai-36  
Question Bank for FA3 / Holiday Home Work  
CLASS 4 -ENGLISH -----FA3 QUESTION BANK -2015-16  
WRITING

Answer the following questions:

1. What is the best time to water the plants ?
2. How did Birbal find out the mother tongue of the Pundit ?
3. Whom came Akbar's court ? What did he claim to know ?
4. What secret did Hiawatha learn about the beast ?
5. Why did the cow refuse to get up ?
6. Who finally made the cow to get up ? How ?
7. What did the lady do to the pony ? What did the child decide to do ?

GRAMMAR

I. FILL IN THE BLANKS USING - A or AN

- (i) It is \_\_\_\_\_ box
- (ii) There is \_\_\_\_\_ black umbrella near the door
- (iii) They have \_\_\_\_\_ apple
- (iv) There is \_\_\_\_\_ alarm clock on the table.
- (v) He has \_\_\_\_\_ umbrella.

3. Choose and fill in the correct word .

- i) The bangle is \_\_\_\_\_ of gold. ( maid / made)
- (ii) I \_\_\_\_\_ the location of the shop ( know / no )
- (iii) The boy was standing \_\_\_\_\_ ( hear / here )
- (iv) I have to \_\_\_\_\_ a letter. ( write / right )
- (v) \_\_\_\_\_ has horns. ( dear / deer )

4. Fill in the blanks using he , his, she, her

1. \_\_\_\_\_ has gone to Mumbai to see \_\_\_\_\_ uncle.

(ii ) \_\_\_\_\_ lives in a village but \_\_\_\_\_ uncle lives in a town.

iii) Sita is a girl. \_\_\_\_\_ likes \_\_\_\_\_ doll.

iv) Raju is a boy \_\_\_\_\_ likes playing.

5. Write any two rhyming words for each.

(i) hire \_\_\_\_\_ , \_\_\_\_\_ ii) food \_\_\_\_\_ , \_\_\_\_\_

(ii) corn \_\_\_\_\_ , \_\_\_\_\_ iv) shake \_\_\_\_\_ , \_\_\_\_\_

v) dry \_\_\_\_\_ , \_\_\_\_\_

6. Fill in the correct form of the word

i) I \_\_\_\_\_ ( draw ) a beautiful picture last week

(ii) It \_\_\_\_\_ ( begin ) to rain yesterday.

(iii) He \_\_\_\_\_ (join ) the army last year.

iv) The boy \_\_\_\_\_ ( cry) yesterday night.

v) We \_\_\_\_\_ ( watch) TV last Friday.

7. Choose and fill in .

i) Lizards \_\_\_\_\_ ( can/ cannot) crawl on the wall.

(ii) He was \_\_\_\_\_ (able / unable ) to climb because it was slippery

(iii) As the test was \_\_\_\_\_ (easy / difficult), we completed it very quickly

iv) We should be \_\_\_\_\_ (kind / cruel ) to animals.

v) She ran fast and \_\_\_\_\_ (won / lost) the first prize .

8. Frame sentence using

(i) Whenever \_\_\_\_\_

.ii) Whatever \_\_\_\_\_

iii) Whenever \_\_\_\_\_

iv) Whoever \_\_\_\_\_

9. Underline the describing word

i) Cinderella was pretty .

(ii) It is a happy family.

(iii ) He wears clean clothes.

iv) The food is delicious.

v) Babu is a tall boy.

10 What work do these people do ? Complete the following.

i) A Milk man \_\_\_\_\_

(ii) A Postman \_\_\_\_\_ .

(iii) An ice cream man \_\_\_\_\_ .

iv) A mason \_\_\_\_\_ .

v) A carpenter \_\_\_\_\_ .

CREATIVE WRITING

1. Write a paragraph each about your i) pet animal ii ) visit to a park iii ) your best friend and iv) Trees and their uses

I ,LEARN THE SPELLING .

- |               |                  |               |              |
|---------------|------------------|---------------|--------------|
| 1. Soak       | 4. Secrets       | 7. Language   | 10. Wrestler |
| 2. Boots      | 5. Swiftly       | 8 . Tickled   | 11. Wallop   |
| 3.Fluent      | 6. Mother tongue | 9. Challenged | 12.Middle    |
| 13. Irritated | 14, Beavers      | 15.Wigwam     | 16 Chicken   |
| 17. Reindeer  | 18. Timid        | 19. Tugged    | 20 Refused   |

## पठन

1. दिए गए अनुच्छेद को पढ़कर पूछे गए प्रश्नों के उत्तर लिखिए:

एक शहर में एक बहुत अमीर सेठ रहता था। अत्यधिक धनी होने पर भी वह बहुत दुखी रहता था। एक दिन ज्यादा परेशान होकर वह एक ऋषि के पास गया और अपनी सारी समस्या ऋषि को बताई। उन्होंने सेठ की बात ध्यान से सुनी और सेठ से कहा की कल तुम इसी वक्त मेरे पास आना। मैं कल ही तेरी सारी समस्याओं का हल बता दूंगा।

सेठ खुशी-खुशी घर गया और अगले दिन जब फिर से ऋषि के पास आया तो उसने फिर से देखा की ऋषि सड़क पर कुछ ढूँढने में व्यस्त थे।

प्रश्न1 एक शहर में कौन रहता था ?

---

प्रश्न2 सेठ परेशान होकर किसके पास गया?

---

प्रश्न 3 ऋषि ने सेठ से क्या कहा ?

---

प्रश्न 4 सेठ जब फिर से ऋषि के पास गया तो ऋषि क्या कर रहा था?

---

प्रश्न 5 विलोम लिखो :

गरीब x \_\_\_\_\_

सुखी x \_\_\_\_\_

## लेखन

नीचे लिखे प्रश्नों के उत्तर दो।

प्रश्न 1 घर में परेशान करने वाले दो जीवों के नाम लिखो।

प्रश्न 2 दूध से बनने वाली चार चीजों के नाम बताओ।

प्रश्न 3 मालिक कैसे समझ लेता है कि बैल काम कर रहा है ?

प्रश्न 4 साबरमती आश्रम में लोग क्या-क्या काम करते थे ?

प्रश्न 5 देश में अकाल पड़ने से क्या हुआ ?

प्रश्न 6 राजसभा में सज्जन और विद्वान लोग क्यों नहीं आते थे?

प्रश्न 7 किन-किन चीजों को कुतरा जा सकता है ?

## व्याकरण

### 1 संज्ञा शब्दों को चुनकर लिखो:

- क) दिल्ली भारत की राजधानी है। \_\_\_\_\_
- ख) घोड़ा घास खा रहा है। \_\_\_\_\_
- ग) महत्मा गाँधी हमारे राष्ट्रपिता हैं। \_\_\_\_\_
- घ) सारा तेल गिर गया। \_\_\_\_\_
- ङ) शेर जंगल में रहता है। \_\_\_\_\_
- च) सीता और गीता पढ़ रही हैं। \_\_\_\_\_

### 2. सर्वनाम शब्दों को चुनकर लिखो:

- क) तुम्हारा नाम क्या है? \_\_\_\_\_
- ख) हम घूमने जाएँगे। \_\_\_\_\_
- ग) शीला मेरी बहन है। \_\_\_\_\_
- घ) आज उसका जन्मदिन है। \_\_\_\_\_
- ङ) यह कमीज राघव की है। \_\_\_\_\_
- च) वह सोने जा है। \_\_\_\_\_

### 3. विशेषण और विशेष्य शब्दों को चुनकर लिखो :

- |                          | विशेषण | विशेष्य |
|--------------------------|--------|---------|
| क) वह गरम चाय पी रहा था। | _____  | _____   |
| ख) नींबू खट्टा होता है।  | _____  | _____   |

- ग) गुलाब लाल रंग का होता है। \_\_\_\_\_
- घ) राधा सुंदर है। \_\_\_\_\_
- इ) उसने काले जूते खरीदे। \_\_\_\_\_

**4. क्रिया शब्दों को चुनकर लिखो:**

- क) राम खेल रहा है। \_\_\_\_\_
- ख) वह पढ़ता है। \_\_\_\_\_
- ग) राधा खाना बना रही थी। \_\_\_\_\_
- घ) मोहन गाना गाएगा। \_\_\_\_\_
- इ) रवि ने क्या सुनाया ? \_\_\_\_\_
- च) पक्षी उड़ रहा है। \_\_\_\_\_

**5 अनेक शब्दों के लिए एक शब्द लिखो:**

- क) अधिक पढ़े लिखे लोग \_\_\_\_\_
- ख) जो अधिक झगड़ता है \_\_\_\_\_
- ग) जिस जगह पर राजा अनाज रखे \_\_\_\_\_
- घ) जो राज करता है। \_\_\_\_\_

**6. 'अ' और 'प्र' उपसर्ग जोड़कर शब्द बनाओ:**

- क) \_\_\_ + निश्चय = \_\_\_\_\_ ख) \_\_\_ + यत्न = \_\_\_\_\_
- ग) \_\_\_ + न्याय = \_\_\_\_\_ घ) \_\_\_ + विश्वास = \_\_\_\_\_
- इ) \_\_\_ + शिक्षा = \_\_\_\_\_ च) \_\_\_ + योग = \_\_\_\_\_
- छ) \_\_\_ + सिद्ध = \_\_\_\_\_ ज) \_\_\_ + देश = \_\_\_\_\_

## सृजनात्मक लेखन

निम्न के बारे में 8 वाक्य लिखो

1. अकाल

2. किसी एक जानवर
3. गाँधी जी
4. कोई पकवान बनाने की विधि
5. किसी चित्र का वर्णन

## वर्तनी

### 1. सही शब्द पर गोला लगाओ:

- क) सूज / सूझ  
 ख) व्यस्त / वयस्ट  
 ग) यात्रा / यातरा  
 घ) आश्रम / आसरम  
 ङ) तशवीर / तस्वीर  
 च) स्वतंत्र / सवतंत्र

### 2. दिए गए सयुंक्त व्यंजनों से शब्द बनाओ:

- क) न्य \_\_\_\_\_ ख) न्न \_\_\_\_\_  
 ग) म्म \_\_\_\_\_ घ) स्व \_\_\_\_\_  
 ङ) ब्द \_\_\_\_\_ च) स्त \_\_\_\_\_

### 3. शब्दों को शुद्ध करके लिखो:

- क) तकशास्त्र \_\_\_\_\_  
 ख) केंदीय \_\_\_\_\_  
 ग) गम \_\_\_\_\_  
 घ) बतन \_\_\_\_\_

### 4. अनुस्वार और अनुनासिक का प्रयोग करके शब्दों को शुद्ध करो:

- क) गाव \_\_\_\_\_ ग) मा \_\_\_\_\_  
 ख) सुदर \_\_\_\_\_ घ) कहा \_\_\_\_\_

## CLASS IV

### KNOWLEDGE BASED COMPETENCY

1. Diameter of a circle whose radius is 28 cm is \_\_\_\_\_

2. Half of

42 is \_\_\_\_\_

68 is \_\_\_\_\_

88 is \_\_\_\_\_

22 is \_\_\_\_\_

48 is \_\_\_\_\_

34 is \_\_\_\_\_

62 is \_\_\_\_\_

72 is \_\_\_\_\_

3. 2,4,6,8 , \_\_\_\_\_, \_\_\_\_\_, \_\_\_\_\_, \_\_\_\_\_.(complete the pattern)

12,24,36,48 , \_\_\_\_\_, \_\_\_\_\_, \_\_\_\_\_, \_\_\_\_\_.(complete the pattern)

22,44,66,88 , \_\_\_\_\_, \_\_\_\_\_, \_\_\_\_\_, \_\_\_\_\_.(complete the pattern)

1,8,15,22 , \_\_\_\_\_, \_\_\_\_\_, \_\_\_\_\_, \_\_\_\_\_.(complete the pattern)

100,90,80,70 , \_\_\_\_\_, \_\_\_\_\_, \_\_\_\_\_, \_\_\_\_\_.(complete the pattern)

4. A \_\_\_\_\_ is the longest chord in a circle.

Radius is ..... of Diameter.

Diameter is ..... of Radius.

A line segment connecting any two points on circle is called .....

5. One third is written as \_\_\_\_\_ in fraction.

One fourth is written as \_\_\_\_\_ in fraction.

One fifth is written as \_\_\_\_\_ in fraction.

One eighth is written as \_\_\_\_\_ in fraction.

One sixth is written as \_\_\_\_\_ in fraction.

6. In  $\frac{8}{9}$  , 8 is \_\_\_\_\_ and 9 is \_\_\_\_\_

In  $\frac{2}{5}$  , 5 is \_\_\_\_\_ and 2 is \_\_\_\_\_

In  $\frac{1}{7}$  , 1 is \_\_\_\_\_ and 7 is \_\_\_\_\_

In  $\frac{3}{8}$  , 8 is \_\_\_\_\_ and 3 is \_\_\_\_\_



In  $\frac{1}{4}$ , 1 is \_\_\_\_\_ and 4 is \_\_\_\_\_

**7. Convert from Radius to Diameter**

<b>Radius</b>	<b>Diameter</b>
<b>10cm</b>	<b>20cm</b>
<b>7cm</b>	
<b>16cm</b>	
<b>18cm</b>	
<b>21cm</b>	
<b>6cm</b>	
<b>22cm</b>	
<b>15cm</b>	
<b>10cm</b>	

8. ADD:

a) 
$$\begin{array}{r} 3 \qquad 4 \\ \text{-----} + \text{-----} = \\ 10 \qquad 10 \end{array}$$

b) 
$$\begin{array}{r} 3 \qquad 5 \\ \text{-----} + \text{-----} = \\ 15 \qquad 15 \end{array}$$

c) 
$$\begin{array}{r} 14 \qquad 22 \\ \text{-----} + \text{-----} = \\ 41 \qquad 41 \end{array}$$

d) 
$$\begin{array}{r} 13 \qquad 25 \\ \text{-----} + \text{-----} = \\ 45 \qquad 45 \end{array}$$

e) 
$$\begin{array}{r} 4 \qquad 2 \\ \text{-----} + \text{-----} = \\ 11 \qquad 11 \end{array}$$

**UNDERSTANDING BASIC COMPETENCY**

**I. FILL IN THE BLANKS:**

1. 2 Kg of apple cost Rs.48. 1 kg apple will cost Rs. \_\_\_\_\_

2. 1Kg of onion cost Rs.32.  $\frac{1}{2}$  kg onion will cost Rs. \_\_\_\_\_

3. 5 Kg of carrot cost Rs.100. 2 kg carrot will cost Rs. \_\_\_\_\_

4. 1 Kg of beans cost Rs.24  $\frac{1}{2}$  kg beans will cost Rs. \_\_\_\_\_

5. 1A ,4D,7G,10J \_\_\_\_\_, \_\_\_\_\_ ( Complete the pattern).

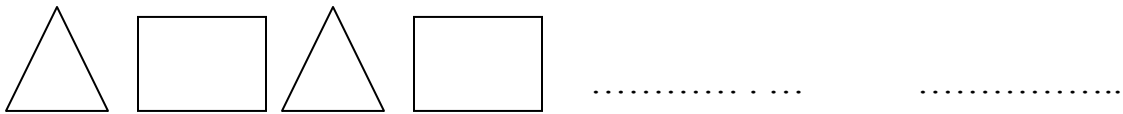
6. A,B,AA,B,AAA,B,AAAA,B, \_\_\_\_\_, \_\_\_\_\_ ( Complete the pattern).

7. 1,2,4,8,16, \_\_\_\_\_, \_\_\_\_\_ ( Complete the pattern).

8. 4A ,8C,12E,16G \_\_\_\_\_, \_\_\_\_\_ ( Complete the pattern).

## II. DO AS DIRECTED:

1. Complete the picture patterns:



2) Tick mark on heavier ?

a) One Kg cotton **or** one Kg Iron **or** both are equal.

b) A Big Man or a small Child

- c) A Rat or an Elephant
- d) Eraser or Geometry Box
- e) Matchbox or Match Stick

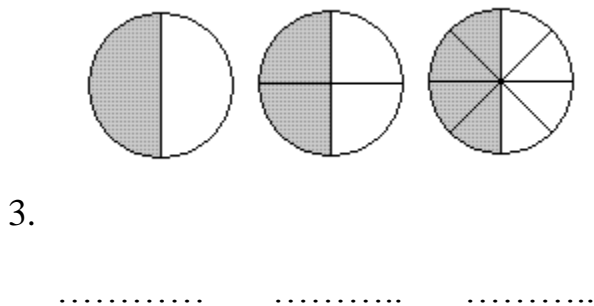
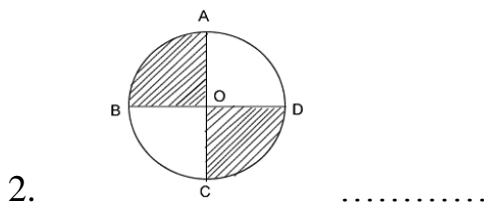

3) Draw a circle of radius 3 cm. Find its diameter. Mark its centre, radius and diameter.

4) Draw a circle of radius 4 cm. Find its diameter. Mark its centre, radius and diameter.

5) Draw a circle of radius 5 cm. Find its diameter. Mark its centre, radius and diameter.

**ABILITY IN COMPUTATION**

**Find the shaded portion**



4. A line segment joining the centre with any point on a circle is called its \_\_\_\_\_ ( chord or radius ).

**I. DO AS DIRECTED;**

1. The radius of a circle is 14 cm. Find the diameter of the circle.
2. The diameter of a circle is 12 cm. Find the radius of the circle.
3. The radius of a circle is 4 cm. Find the diameter of the circle.
4. There are 56 children in a class.  $\frac{1}{4}$  of them like to play chess. Find the number of children who like chess?
5. There are 64 children in a class.  $\frac{1}{4}$  of them are boys. Find the number of girls?
6. There are 48 children in a class.  $\frac{1}{2}$  of them are boys. How many children are girls?

**II. OBSERVE THE TABLE AND ANSWER THE FOLLOWING :**

S. NO	VEGETABLES	COST IN RUPEES
1.	Tomato	Rs. 16 /-
2.	Carrot	Rs. 28 /-
3.	Onion	Rs. 26 /-
4.	Potato	Rs. 18/-

1. Find the cost of half ( $\frac{1}{2}$ ) Kg of tomato?
2. Find the cost of quarter ( $\frac{1}{4}$ ) kg of carrot?
3. Find the cost of ( $\frac{1}{4}$ ) quarter kg of tomato and ( $\frac{1}{4}$ ) quarter kg of carrot ?
4. Find the cost of ( $\frac{1}{2}$ ) half kg of onion and ( $\frac{1}{2}$ ) half kg of potato ?

**III. OBSERVE THE TABLE AND ANSWER THE FOLLOWING :**

S. NO	SPORTS	NO. OF PLAYERS
1.	CHESS	24
2.	KHO KHO	32
3.	CRICKET	28
4.	FOOTBALL	16

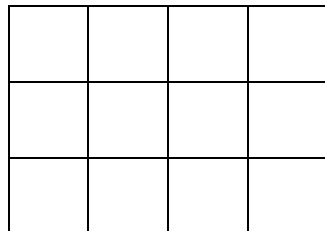
1. Find the number of players who play kho kho ?
2. Find the number of players who play chess and football?
3. Find the total number of players ?
4. Only 16 players play .....

**PROBLEM SOLVING ABILITY**

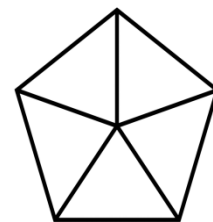
**I. COMPLETE THE FOLLOWING:**

1.  $500\text{gm} = 50\text{gm} + \dots + \dots$
2.  $100\text{gm} = \dots + \dots + \dots$
3.  $1000\text{gm} = \dots + 100\text{gm} + \dots$
4.  $750\text{gm} = \dots + 50\text{gm} + \dots$
5.  $250\text{gm} = \dots + \dots + \dots$
6.  $\frac{1}{2}$  is written as \_\_\_\_\_ (write in words).
7.  $\frac{1}{4}$  is written as \_\_\_\_\_(write in words).

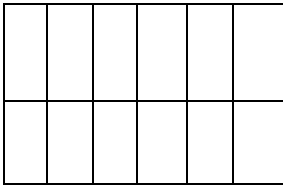
**II. SHADE AND WRITE THE SHADED PORTION THE FOLLOWING:**



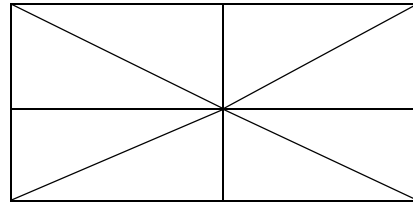
-----



-----



.....



.....

**III. Mr. Mohan wants change for Rs. 500**

**How many notes will he get if he wants in return?**

All 100 rupee note .....

All 50 rupee note .....

All 20 rupee note .....

All 10 rupee note .....

**IV. Mr. AJAY wants change for Rs. 1000**

**How many notes will he get if he wants in return?**

All 100 rupee note .....

All 50 rupee note .....

All 20 rupee note .....

All 10 rupee note .....

All 500 rupee note .....

QUESTION BANK / HOLIDAY HOME WORK FOR FA3

1. An axe is used in \_\_\_\_\_
2. The speciality of the banyan tree is it has  
\_\_\_\_\_
3. The festival of harvest in Assam is known as  
\_\_\_\_\_
4. The bird which has long beak helps to \_\_\_\_\_
5. The latest mode of fast communication is available in \_\_\_\_\_ is called \_\_\_\_\_.
6. Cholera is caused by  
\_\_\_\_\_
7. Name the place which you visited during your summer vacation \_\_\_\_\_
8. Pigeons live in  
\_\_\_\_\_
9. \_\_\_\_\_ is used for sprinkling seeds.
10. \_\_\_\_\_ is used to pull the onions.
11. Koel lays eggs in \_\_\_\_\_ nest.
12. \_\_\_\_\_ birds make its nest stitching leaves together.

13. we lose lots of water when we have \_\_\_\_\_ and \_\_\_\_\_
14. Cats have \_\_\_ for \_\_\_ and \_\_\_\_\_ the meat.
15. We get the news from world around us mainly through \_\_\_ and \_\_\_\_\_
16. \_\_\_\_\_ vegetable stays for long time but \_\_\_\_\_ gets spoilt within a day or two.
17. \_\_\_\_\_ is the main source of water.
18. \_\_\_\_\_ is the capital of Maharashtra.
19. \_\_\_\_\_ is an example of steamed food item.
20. Sikhs worship in \_\_\_\_\_

II ANSWER THE FOLLOWING:

1. Why do birds build nests?
2. What is Bhela Ghar ? Where do you see them ? When?
3. Why should the weeds be removed ?
4. How does the different parts of the plant get water?
5. What type of roots do banyan trees have?
6. Write few sentences about desert plants?
7. Write at least 4 differences between city and village life.
8. Classify the following : ( Beetroot , cabbage , cauliflower , spinach )



Root vegetable: \_\_\_\_\_ Leaf

: \_\_\_\_\_

Flower: \_\_\_\_\_ Plant :

\_\_\_\_\_

9. Whether there has been any fight between you and any family members on watching TV ? How did you solve it?

10. What is ORS ? When and why do we use it ?

### III Long answers

1. Explain the process of cultivation with suitable diagram.

2. Mark the following places in the given India political map.

a) Tamilnadu

b) Karnataka

c) Maharashtra

d) Assam



### III Answer in detail

3. a) What are water borne diseases ?
  - b) List the diseases caused due to consumption of impure water.
  - c) List the different methods used in purification of water.
- 4) List the occasions where people eat together.
- 5) List the advantages and disadvantages of city life.
- 6) List the advantages and disadvantages of village life.
- 7) Explain the celebration of Bihu in Assam.